

TASK:

Determine the number of tiles needed for each figure.

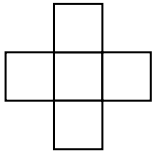


Figure 1

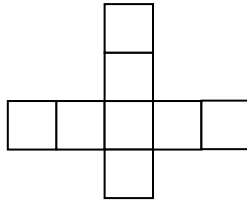


Figure 2

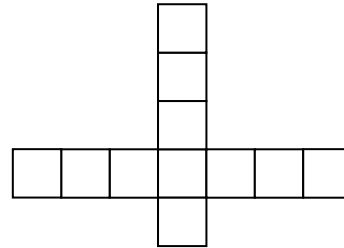


Figure 3

Write a “shortcut” for finding the total needed for each figure.

How are the equation, the scatter plot, the table, and the graph similar? What representation do you prefer for this situation? Explain.